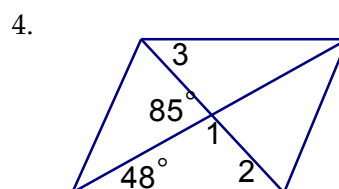
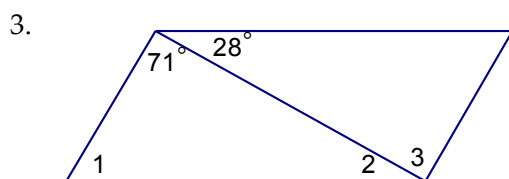
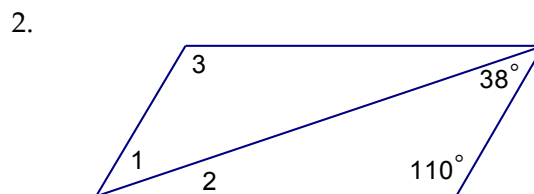


Name: \_\_\_\_\_ Class Period: \_\_\_\_\_ Date: \_\_\_\_\_

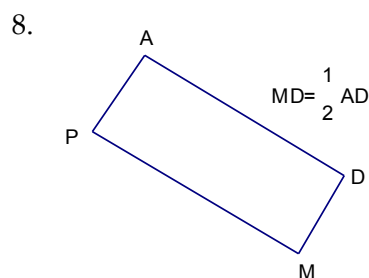
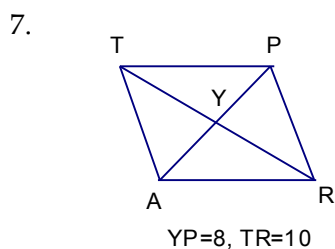
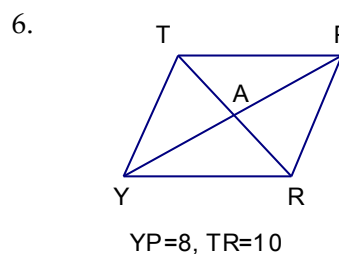
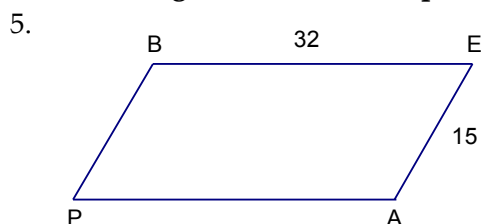
Alpha Geometry

Chapter 5 Worksheet 5.5a ~ Properties of Parallelograms

Find the measures of the numbered angles for each parallelogram.



Find the length of  $\overline{AP}$  in each parallelogram.



9. The perimeter of parallelogram RSTW is 48 cm. If  $RS=17$ cm, find the lengths of the other sides of the parallelogram.

Find the value of the variables in each parallelogram.

