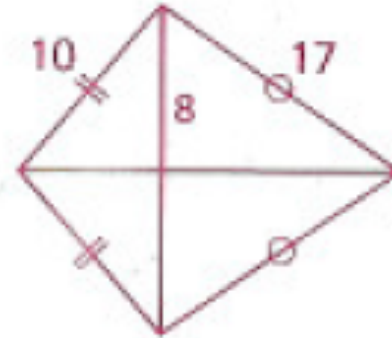


Homework

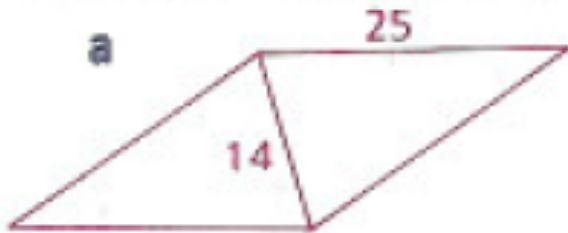
p. 529: 4, 5, 7-9
Study for Area Quiz!!!

4 Find the area of the kite shown.

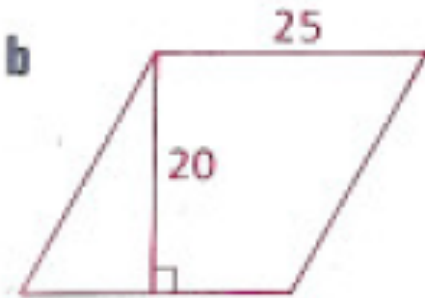


5 Find the area of each rhombus.

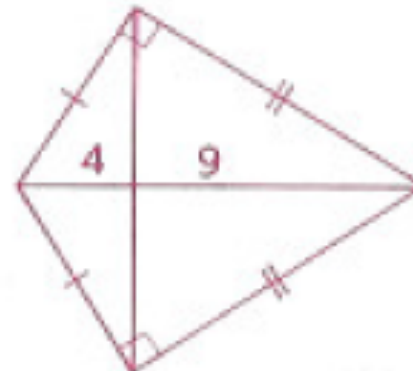
a



b



7 Find the area of the kite shown.



8 Find the area of a rhombus with a perimeter of 40 and one angle of 60° .

- 9 a** Find the areas of region I, region II, and region III.
b Find the area of $\triangle OBD$.

