

Homework

p. 862: 3-5, 16, 20, 24, 28

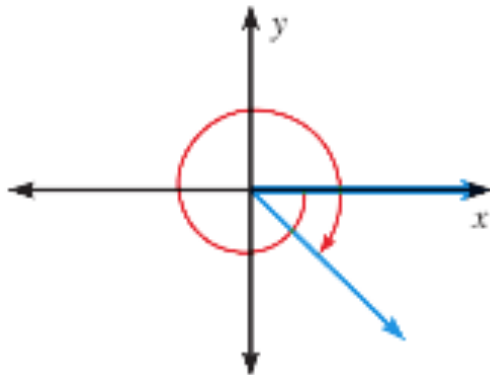
VISUAL THINKING Match the angle measure with the angle.

3. -240°

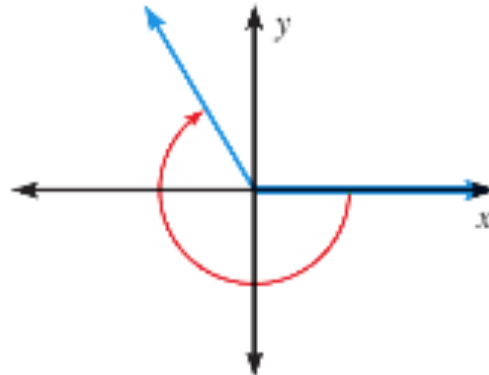
4. 600°

5. $-\frac{9\pi}{4}$

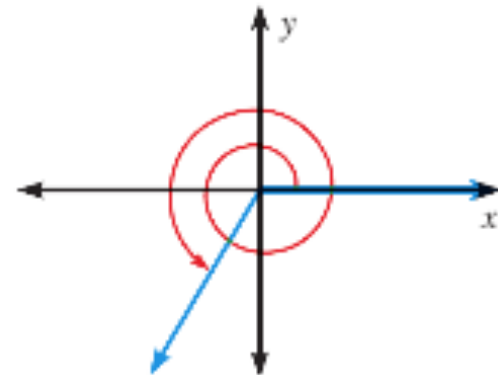
A.



B.



C.



FINDING COTERMINAL ANGLES Find one positive angle and one negative angle that are coterminal with the given angle.

16. 255°

20. $-\frac{7\pi}{6}$

CONVERTING MEASURES Convert the degree measure to radians or the radian measure to degrees.

24. 315°

28. $-\frac{\pi}{4}$