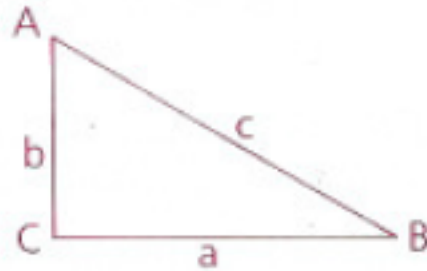


Objective

Students will be able to use the Pythagorean theorem.

If the square of the measure of one side of a triangle equals the sum of the squares of the measures of the other two sides, then the angle opposite the longest side is a right angle.

If $a^2 + b^2 = c^2$, then
 $\triangle ABC$ is a right \triangle
and $\angle C$ is the right \angle .



If c is the length of the longest side of a triangle and

- $a^2 + b^2 > c^2$, then the triangle is acute
- $a^2 + b^2 = c^2$, then the triangle is right
- $a^2 + b^2 < c^2$, then the triangle is obtuse

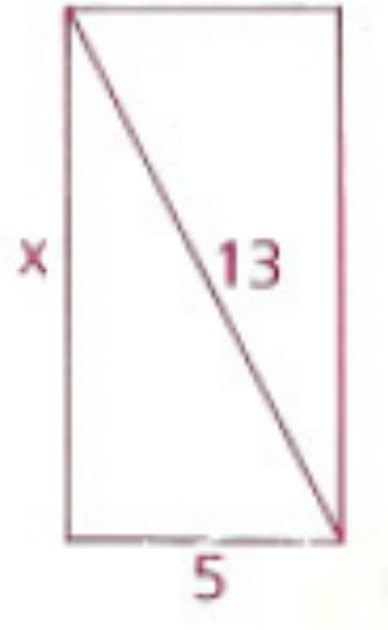
Find the perimeter of the rectangle.

$$x^2 + 5^2 = 13^2$$

$$x^2 + 25 = 169$$

$$x^2 = 144$$

$$x = \underline{\pm 12} \text{ (Reject -12)}$$



$$\text{Perimeter} = 5 + 12 + 5 + 12 = 34$$

Nadia skipped 3 miles north, 2 miles east, 4 miles north, 13 miles east, and 1 mile north. How far is Nadia from where she started?

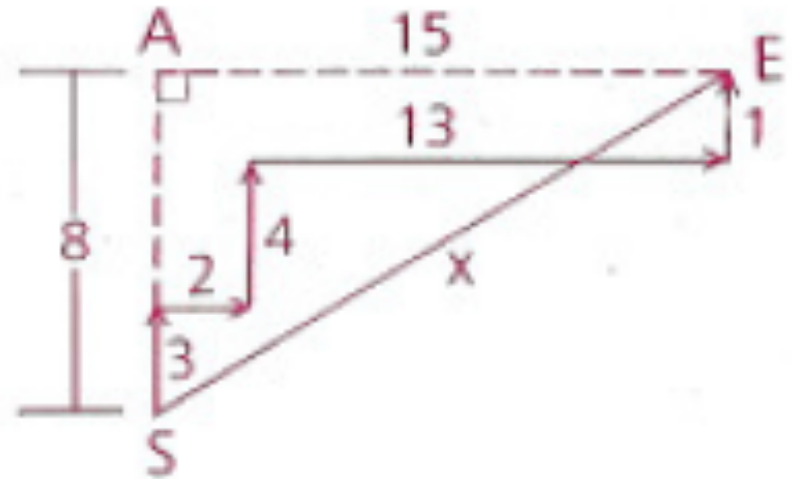
****draw a picture to help**

$$8^2 + 15^2 = x^2$$

$$64 + 225 = x^2$$

$$289 = x^2$$

$$\pm 17 = x \text{ (Reject -17)}$$



She is 17 miles Northeast

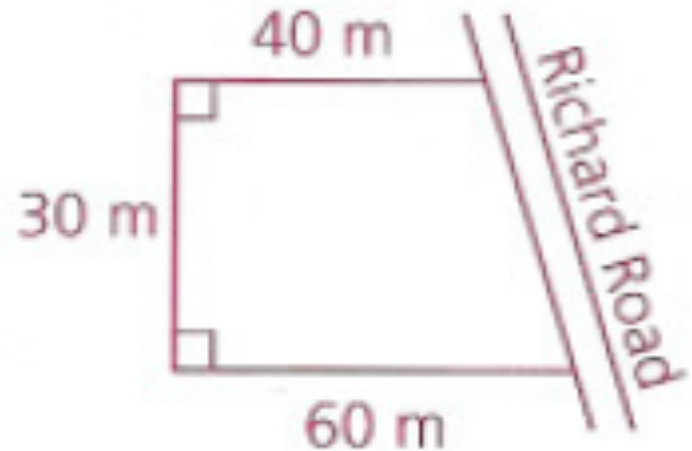
George and Diane bought a plot of land along Richard Road with the dimensions shown.

a) Find the area of the plot.

1500 sq. meters

b) Find, to the nearest meter, the length of frontage on Richard Road.

approx. 36 meters

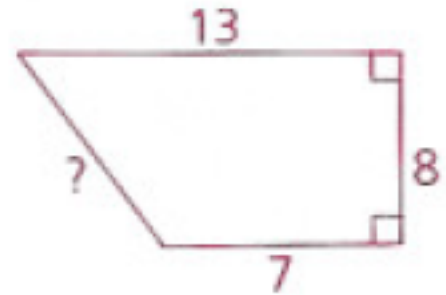


Homework

p.387: 2, 4, 7, 13, 17

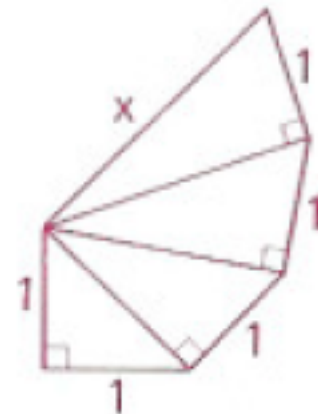
- 2 Find the length of the diagonal of a square with perimeter 12 cm.
- 4 Find the perimeter of a rectangle whose diagonal is 17 mm long and whose base is 15 mm long.

- 7** Find the missing length in the trapezoid.



- 13** Al Capone walked 2 km north, 6 km west, 4 km north, and 2 km west. If Big Al decides to “go straight,” how far must he walk across the fields to his starting point?

- 17** Solve for x in the partial spiral to the right.



Objective

Students will be able to identify the relationships between the parts of a right triangle when an altitude is drawn to the hypotenuse.

What is an altitude of a triangle?

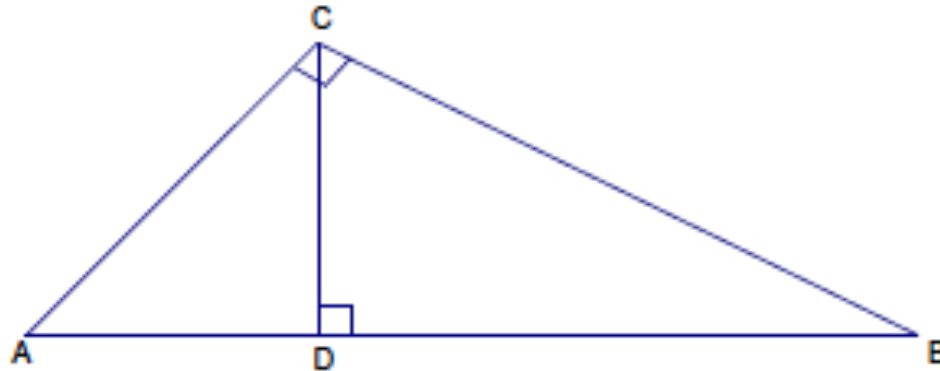
The altitude of a triangle is the perpendicular segment from a vertex to the line containing the side opposite the vertex.

We can use the altitude to help us prove that **right** triangles are similar.

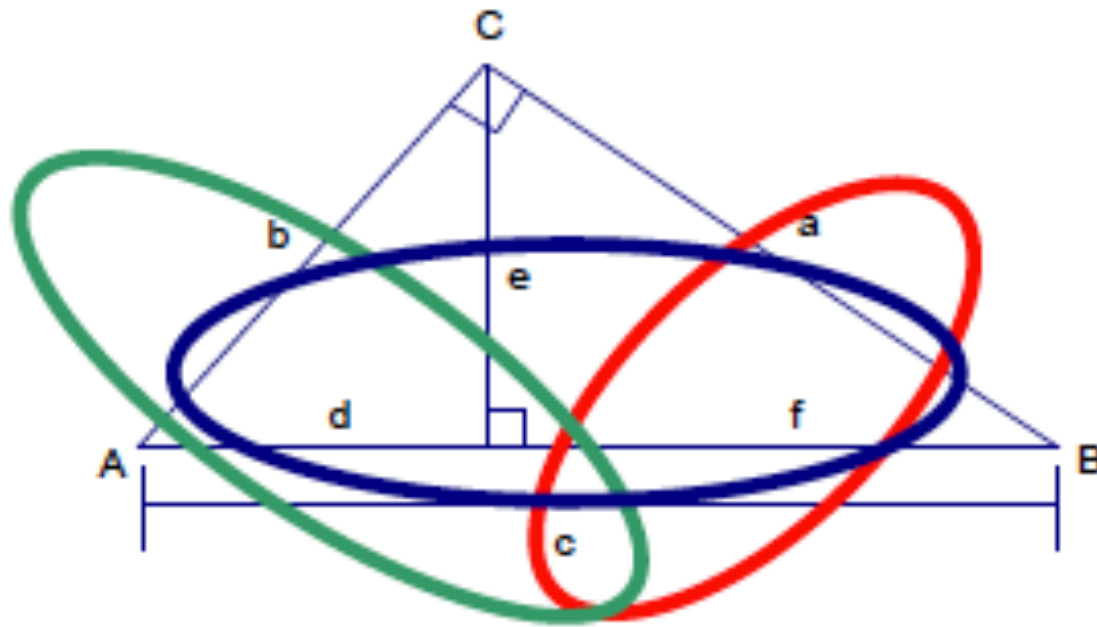
Altitude-on-Hypotenuse Theorem

1) The altitude to the hypotenuse of a right triangle divides the triangle into two triangles that are similar to the original triangle and to each other.

$$\triangle ABC \sim \triangle ACD \sim \triangle CBD$$

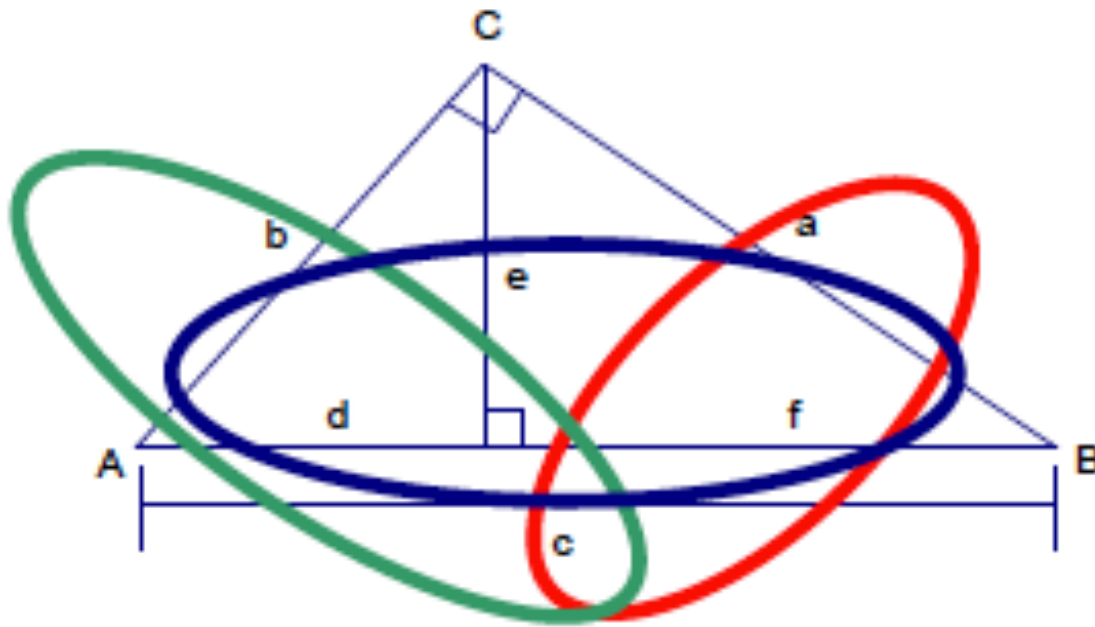


This theorem allows us to set up the following proportions using the geometric mean. Recall that the geometric mean of a and b is the positive number x such that $\frac{a}{x} = \frac{x}{b}$



2) The altitude (to the hypotenuse) is the geometric mean (mean proportional) between the segments of the hypotenuse.

$$\frac{d}{e} = \frac{e}{f}$$



3) Each leg of the given right triangle is the geometric mean (mean proportional) of the adjacent part of the hypotenuse and the entire hypotenuse.

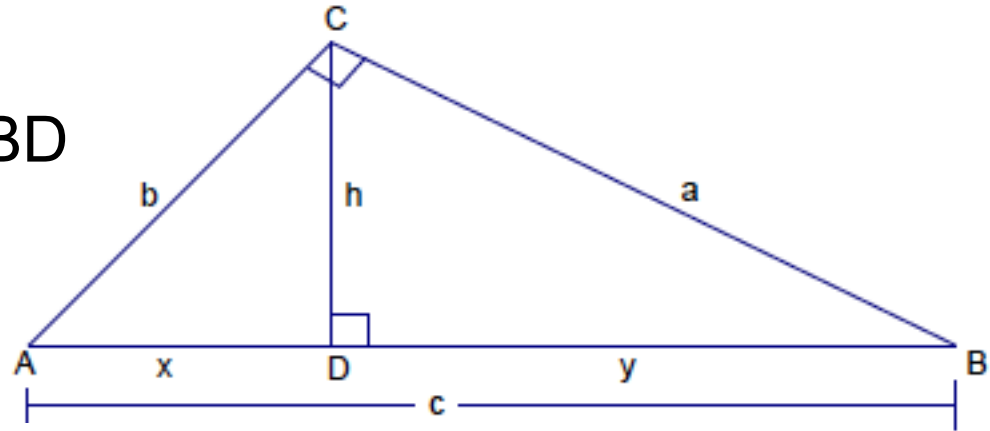
$$\frac{d}{b} = \frac{b}{c}$$

$$\frac{f}{a} = \frac{a}{c}$$

Refer to the figure to complete each proportion. You need to know that all three triangles are similar.

$$\triangle ABC \sim \triangle ACD \sim \triangle CBD$$

Make sure you explain why!



$$1) \frac{x}{h} = \frac{y}{h}$$

$$2) \frac{a}{b} = \frac{h}{h}$$

$$3) \frac{a}{b} = \frac{h}{h}$$

$$4) \frac{a}{c} = \frac{y}{c}$$

$$5) \frac{a}{c} = \frac{h}{c}$$

$$6) \frac{b}{x} = \frac{b}{y}$$

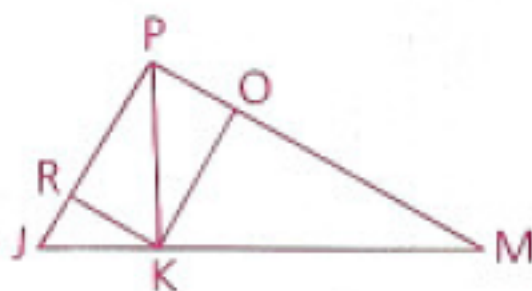
Objective

Students will be able to identify the relationships between the parts of a right triangle when an altitude is drawn to the hypotenuse.

Pythagorean Theorem, Distance Formula, and
Altitude-on-Hypotenuse Theorems Quiz on Tuesday

Given: $\overline{PK} \perp \overline{JM}$, $\overline{RK} \perp \overline{JP}$, $\overline{KO} \perp \overline{PM}$

Prove: $(PO)(PM) = (PR)(PJ)$



1 $\overline{PK} \perp \overline{JM}$	1 Given
2 $\angle PKJ$ is a right \angle .	2 \perp segments form right \angle s.
3 $\angle PKM$ is a right \angle .	3 Same as 2
4 $\overline{RK} \perp \overline{JP}$	4 Given
5 \overline{RK} is an altitude.	5 A segment drawn from a vertex of a $\triangle \perp$ to the opposite side is an altitude.
6 $(PK)^2 = (PR)(PJ)$	6 If the altitude is drawn to the hypotenuse of a right \triangle , then either leg of the given right \triangle is the mean proportional between the hypotenuse and the segment of the hypotenuse adjacent to that leg.
7 Similarly, $(PK)^2 = (PO)(PM)$	7 Reasons 1-6
8 $(PO)(PM) = (PR)(PJ)$	8 Transitive Property

Find the values of the variables. We can use geometric means.

$$\frac{x}{3} = \frac{12}{x}$$

$$x^2 = 36$$

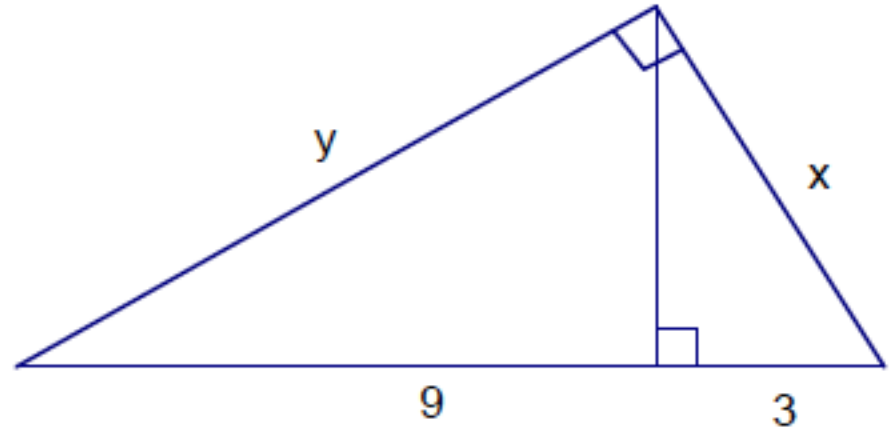
$$x = 6$$

$$\frac{y}{9} = \frac{12}{y}$$

$$y^2 = 108$$

$$y = \sqrt{108}$$

$$y = 6\sqrt{3}$$



Find the values of the variables. We can use geometric means.

$$\frac{x}{3} = \frac{8}{x}$$

$$\frac{y}{3} = \frac{5}{y}$$

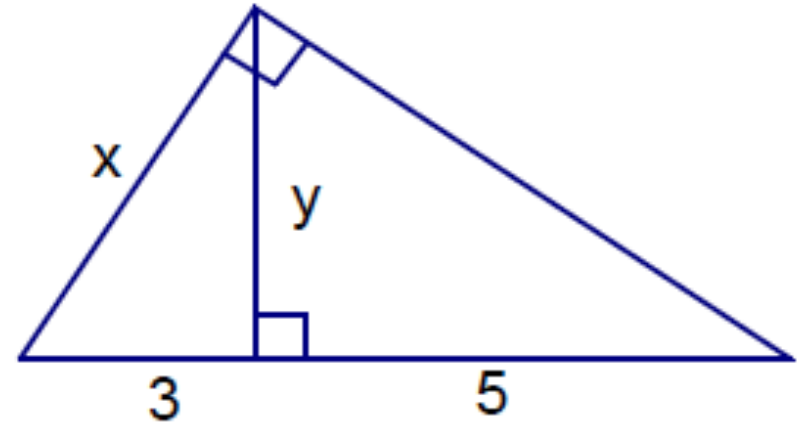
$$x^2 = 24$$

$$y^2 = 15$$

$$x = \sqrt{24}$$

$$y = \sqrt{15}$$

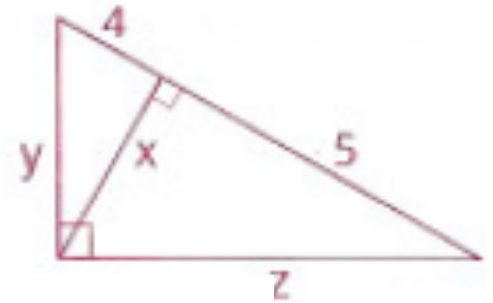
$$x = 2\sqrt{6}$$



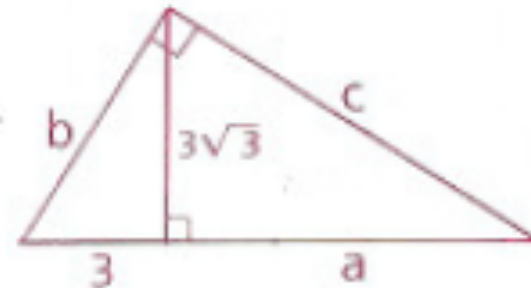
Homework

p.379: 2, 5, 6, 14, 17

- 2 a Find $2x$. b Find $\frac{1}{2}y$. c Find $z + 8$.

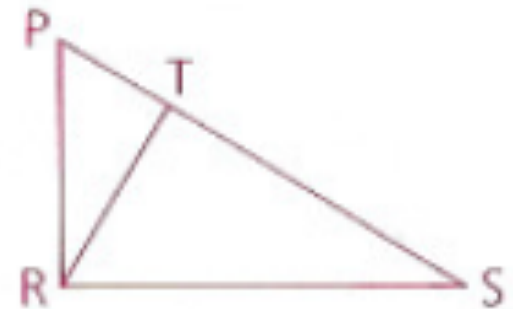


- 5 a Find a .
b Find ab .
c Find $a + b + c$.

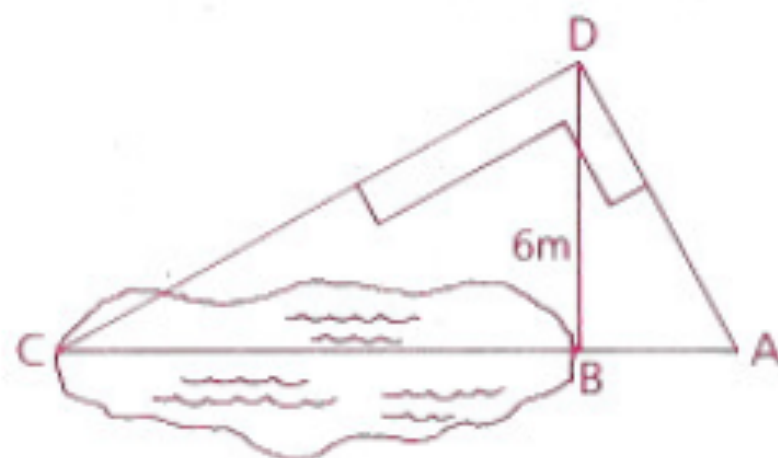


- 6 Given: \overline{RT} is an altitude. $\angle PRS$ is a right \angle .

Conclusion: $\frac{PR}{RS} = \frac{RT}{ST}$



- 14** As Slarpy stood at B, the foot of a 6-m pole, he asked Carpy how far it was across the pond from B to C. Carpy got his carpenter's square and climbed the pole. Using his lines of sight, he set up the figure shown. When Slarpy found that $AB = 3$ m, Carpy knew the answer. What was it?



- 17**
- a** If $AD = 7$ and $AB = 11$, find CD .
 - b** If $CD = 8$ and $AD = 6$, find AB .
 - c** If $AB = 12$ and $AD = 4$, find BC .
 - d** If $AC = 7$ and $AB = 12$, find BD .

