

## Surface Area and Volume (Chapter 12) Review

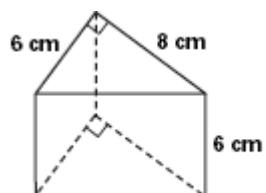
Alpha Geometry, Glawe

Name: \_\_\_\_\_

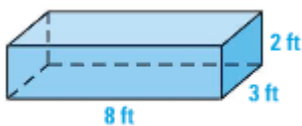
Date: \_\_\_\_\_

Find the Surface Area and Volume of each figure.

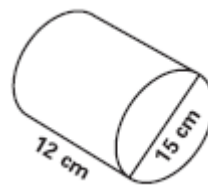
1.



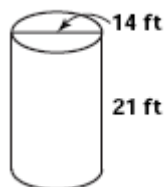
2.



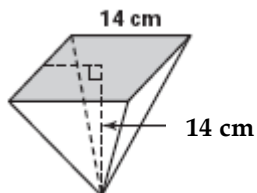
3.



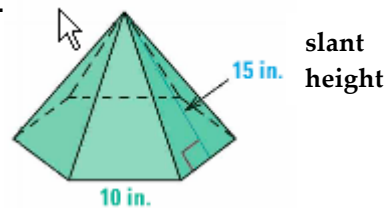
4.



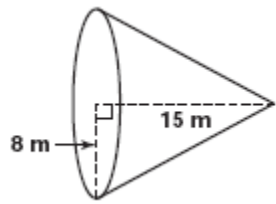
5.



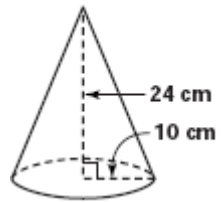
6.



7.



8.



9.

